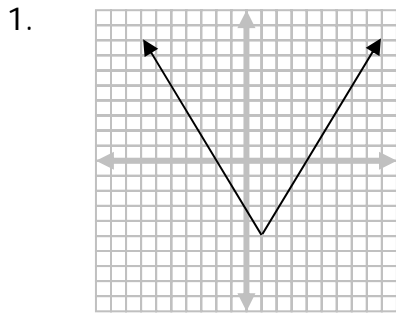


For each of the following:

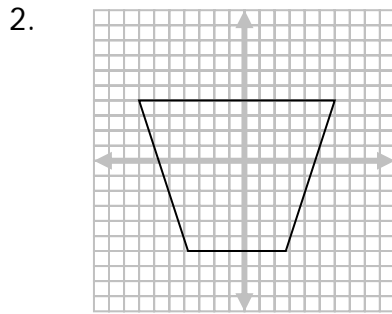
a. Determine whether each is a function. b. State the domain. c. State the range.



1a. _____

1b. _____

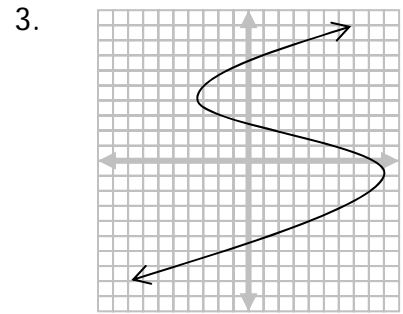
1c. _____



2a. _____

2b. _____

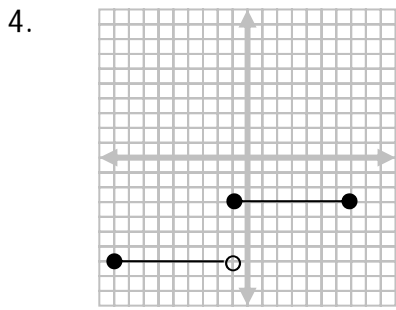
2c. _____



3a. _____

3b. _____

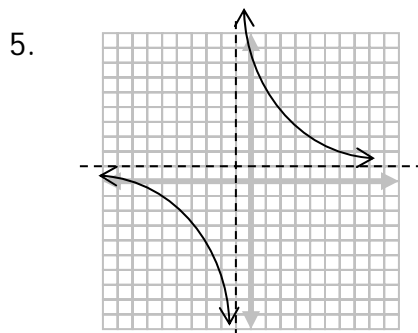
3c. _____



4a. _____

4b. _____

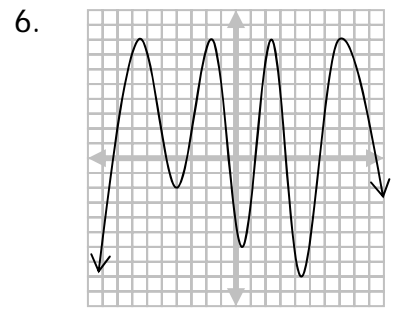
4c. _____



5a. _____

5b. _____

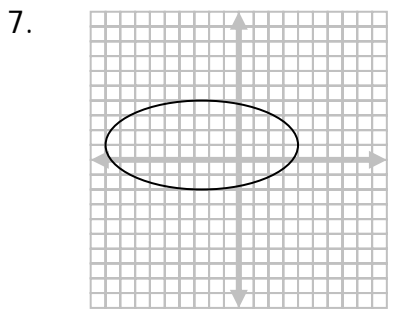
5c. _____



6a. _____

6b. _____

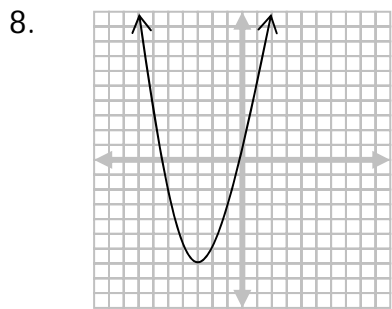
6c. _____



7a. _____

7b. _____

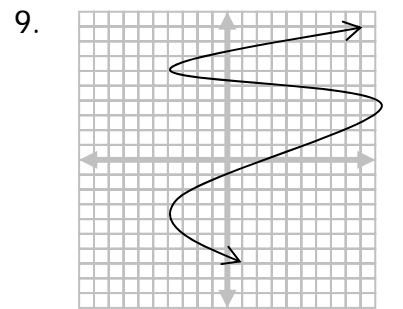
7c. _____



8a. _____

8b. _____

8c. _____



9a. _____

9b. _____

9c. _____